





The following provides examples of the types of activities, questions and other information which could be included in an LLN indicator tool. Remember, it is important that you develop your own tasks which are relevant to the units of competency which provide the basis for the learning program.







Sample activity 1

Look at the safety signs and symbols below. Write in the space provided what they mean.

Sign	Description
	
	
	
	

Sample activity 2

Match each symbol in the table below to its message in the right column. The first one has been done for you.

Symbols	Message
	Wear ear muffs
	Wear gloves
	No smoking
	Hard hat area
	Wear goggles
	Use breathing protection

Sample activity 3

Look at these pictures of tools and materials used for cleaning. Under each picture, write its name using words from the list below.


















Broom
Cleaning brush
Cleaning chemicals
Cloth

Mop
Polisher
Scrapers
Scrubber

Sponge
Steamer
Trolley
Vacuum cleaner

Sample activity 4

Write something about the picture below.



Sample activity 5

Explain briefly why you work in your job or industry?

Sample activity 6

Look at the example Security Logbook below.

Location: <u>Signature Enterprises, 13 George Street, Wollongong</u>			
(Note: include on and off duty, key handover, briefing on new instructions)			
Date	Time	Security Officer	Report Incident
13/4	1520	M. Smith	Sign in
	1720		Collected keys from Peter Delaney. Commenced patrol of George Street and Brown Road sides (fire escape door at George Street stairway open). Hydraulics not working to make door close. Secured exit, called Peter to arrange repairs.
	1730		Forklift left unattended at front office, blocking access. Went inside office to talk to driver.

What is the name of the security officer?

What time did the security officer sign in?

In your own words, tell us what happened at 5.30pm?

Who will repair the door?

Sample activity 7

Read the questions below and put your answers in the box next to the question.

Question	Answers
Spike the dog eats a can of dog food every day which costs \$1.20 How much does it cost to feed him for a week?	
What is 10% of \$58?	
I want to pour a concrete base measuring 6m by 5m with a depth of 100mm for a shed. How much concrete will I need in cubic metres?	
$26 + 35 =$	
$560 - 85 =$	
$365 \times 4 =$	
$144 \div 12 =$	
I have 2 houses for sale for \$230,000 each. I will receive a 5% commission on sales. If I sell both houses, how much commission will I receive?	